

Module 9 - Consumerism

ACTIVITY SHEET 9-4

Find the better deal

Figure out which is the better deal by calculating the unit cost.

Question 1 - Canned Pop:

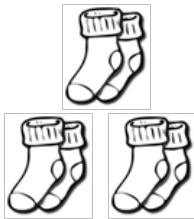


a) 99¢ for 1 can

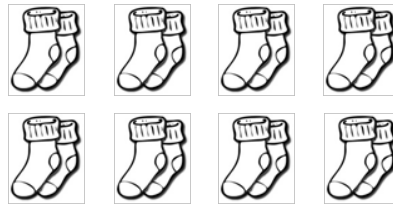


or b) \$8 for 12 cans

Question 2 – Socks:




a) \$3.75 for 3 pairs



or b) \$12.50 for 8 pairs

Question 3 – Cereal:



a) \$3.75 for 675 grams



or b) \$2.50 for 350 grams

Question 4 – Soup:



a) \$1.69 for 19 ounces



or b) \$1.39 for 16 ounces